

ST.THOMAS KINDERGARTEN, SAHIBABAD
MATHEMATICS PRACTICE SHEET
CYCLE-I

TOTAL MARKS:- 25
 WRITTEN:- 20
 ORAL :- 5

NAME:- _____

ROLL NO. :- _____ CLASS-PREP. SEC.- _____

DATE:- _____

Q1. Circle the smallest number in each row:-

($\frac{1}{2} \times 4 = 2$)

29 33 24 42

48 43 45 47

35 36 34 32

16 28 13 17

Q2. Circle the largest number in each row :-

($\frac{1}{2} \times 4 = 2$)

19 13 12 11

9 6 4 7

12 9 41 33

50 26 37 45

Q3. What comes after:-

($1 \times 4 = 4$)

36 28

19 33

Q4. What comes in between:-




($1 \times 4 = 4$)

47 49 12 14

21 23 4 6

Q5. Match the shapes with pictures:-

(1x3=3)



Q6. Counting (31-50):-

(¼x20=5)

T	O		T	O
.	.		.	.
.	.		.	.
.	.		.	.
.	.		.	.
.	.		.	.
.	.		.	.
.	.		.	.
.	.		.	.
.	.		.	.
.	.		.	.

Oral:- Learn counting (1-50)