

**ST. THOMAS SCHOOL
WORKSHEET
CLASS -II
SUBJECT- MATHS**

Q1 Fill in the blanks:

- (a) A _____ is used to compare the weights of two different objects.
- (b) _____ comes after Sunday..
- (c) There are _____ days in a week.
- (d) Kilogram is denoted by_____.
- (e) _____ is the shortest month of the year..
- (f) There are _____ days in a normal year.
- (g) If yesterday was Sunday, tomorrow will be _____.
- (h) _____ comes after March.

Q2 Add the following:

$$\begin{array}{r} (a) \quad 3 \quad 7 \quad 4 \\ + 2 \quad 2 \quad 8 \\ \hline \\ \hline \end{array}$$

$$\begin{array}{r} (b) \quad 5 \quad 6 \quad 9 \\ + 2 \quad 1 \quad 5 \\ \hline \\ \hline \end{array}$$

Q3 Complete the names :

- (a) J _ _ n _ _ _ r y
- (b) T _ _ e _ _ d _ _ y

Q4 Write in expanded form:

- (a) 1 5 6 = _____
- (b) 3 4 9 = _____
- (c) 5 0 8 = _____







Q5 Write in short form :

- (a) 2 hundred + 3 tens + 8 ones = _____
- (b) 1 hundred + 4 tens = _____
- (c) 3 hundred + 5 ones = _____

Q6 Write the dates for the following:

- (a) 1st day of the year _____
- (b) Children's Day _____
- (c) Republic Day _____
- (d) Teacher's Day _____

Q 7 Shopping :

Ball	Eraser	Kite	Lunch box	Water bottle	Egg
Rs.20	Rs. 3	Rs. 5	Rs. 53	Rs. 35	Rs. 3
					

Answer the following :

(a) What is most costly? _____

(b) What is least costly? _____

(c) Ball + Water bottle =

_____ + _____ = _____

(d) Which two things cost same? _____

(e) Which things cost less than Rs. 20 = _____

Q8 Solve :

(a) 200 g + 400 g = _____

(b) 15 kg + 23 kg = _____

(c) 65 kg - 25 kg = _____

(d) 100 g + 700 g + _____ = 1 kg

(e) 350 g + _____ = 800 g

Q 9 Draw notes and coins to make the given amount :

(a) 12 = _____

(b) 43 = _____