

ST. THOMAS SCHOOL, SAHIBABAD
WORKSHEET FOR CYCLE-IV (2019-20)
CLASS - II
SUBJECT- MATHEMATICS

Q1. Fill in the blanks:

- a) _____ is the standard unit of measuring length.
- b) Distance between two cities is measured in _____.
- c) Metre is denoted by _____.
- d) 1 km = _____m.
- e) The two non- standard unit of length are _____ and _____.
- f) Centimetre is denoted by _____.

Q2. Solve:

- a) $50\text{km} + 40\text{km} = \underline{\hspace{2cm}}$
- b) $35\text{m} - 10\text{m} = \underline{\hspace{2cm}}$
- c) $27\text{cm} + 15\text{cm} = \underline{\hspace{2cm}}$
- d) $36\text{km} - 22\text{km} = \underline{\hspace{2cm}}$
- e) $29\text{cm} - 16\text{cm} = \underline{\hspace{2cm}}$

Q3. Add:

- | | | |
|---|---|---|
| a) 3 5 6

+ 2 2 7

_____ | b) 6 4 9

+ 1 8 3

_____ | c) 4 3 4

+ 2 9 6

_____ |
| _____ | _____ | _____ |

Q4. Subtract:

- | | | |
|---|---|---|
| a) 5 3 5

- 2 8 6

_____ | b) 4 1 2

- 2 3 7

_____ | c) 6 0 3

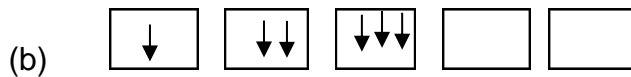
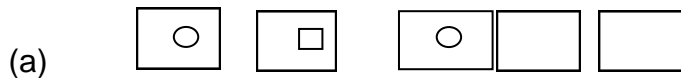
- 2 4 5

_____ |
| _____ | _____ | _____ |

Q5. Complete the pattern:

- (a) $\uparrow, \downarrow, \uparrow, \downarrow$ _____, _____, _____
- (b) $\circ, \triangle, \circ, \triangle$, _____, _____, _____
- (c) $\star, \star\star, \star\star\star, \star\star\star\star$, _____, _____, _____
- (d) 1, 3, 5, 7, _____, _____, _____
- (e) 10, 20, 30, 40, _____, _____, _____
- (f) 40, 38, 36, 34, _____, _____, _____
- (g) 24, 27, 30, 33, _____, _____, _____

Q6. Look at the patterns and fill up the boxes.



Q7. Fill in the blanks.

- (a) $9 \times 6 =$ _____
- (b) $7 \times 9 =$ _____
- (c) $8 \times 4 =$ _____
- (d) $5 \times 6 =$ _____

Q8. Cross out the number which is the difference of given two numbers.

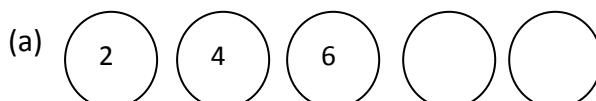
(a) $19 - 8$

7	9
11	6

(b) $27 - 9$

9	18
10	11

Q10. Find the missing numbers.



Q11.Solve the word problems with the help of statements:

(a) There are 85 pages in a drawing book. Sonia had coloured 39 pages. How many pages are left to colour?

Ans. _____

(b) Zanib purchased a pen for Rs.25 and a book for Rs.45. How much money did she spend in total?

Ans. _____

