

**ST. THOMAS KINDERGARTEN, SAHIBABAD**  
**MATHEMATICS PRACTICE WORKSHEET**  
**CYCLE-IV (2023-2024)**

NAME:- \_\_\_\_\_

CLASS-PREP. SEC \_\_\_\_

DATE:- \_\_\_\_\_

Q1. Subtraction

a) 
$$\begin{array}{r} 6 \\ - 2 \\ \hline \\ \hline \end{array}$$

b) 
$$\begin{array}{r} 4 \\ - 3 \\ \hline \\ \hline \end{array}$$

c) 
$$\begin{array}{r} 8 \\ - 1 \\ \hline \\ \hline \end{array}$$

d) 
$$\begin{array}{r} 9 \\ - 6 \\ \hline \\ \hline \end{array}$$

e) 
$$\begin{array}{r} 7 \\ - 5 \\ \hline \\ \hline \end{array}$$

f) 
$$\begin{array}{r} 2 \\ - 0 \\ \hline \\ \hline \end{array}$$

Q2. Circle the lowest number from the group of numbers in each box.

a) 

55	35	45	65
----	----	----	----

b) 

12	8	16	28
----	---	----	----

Q3. What comes in between the given numbers.

a) 58 \_\_\_\_\_ 60

b) 19 \_\_\_\_\_ 21

c) 11 \_\_\_\_\_ 13

d) 89 \_\_\_\_\_ 91

Q4. Tick the correct number name

a) 21 -  Twenty-Four  Twenty-One

b) 17 -  Seventeen  Seven

c) 9 -  Nine  Seven

d) 30 -  Twenty  Thirty

e) 28 -  Twenty-Eight  Twenty-Five

Q5. Addition

a) 
$$\begin{array}{r} 0 \\ + 4 \\ \hline \end{array}$$

b) 
$$\begin{array}{r} 3 \\ + 7 \\ \hline \end{array}$$

c) 
$$\begin{array}{r} 7 \\ + 7 \\ \hline \end{array}$$

d) 
$$\begin{array}{r} 5 \\ + 4 \\ \hline \end{array}$$

e) 
$$\begin{array}{r} 3 \\ + 1 \\ \hline \end{array}$$

f) 
$$\begin{array}{r} 9 \\ + 4 \\ \hline \end{array}$$

Q6. See the number and write their number name

26 - \_\_\_\_\_

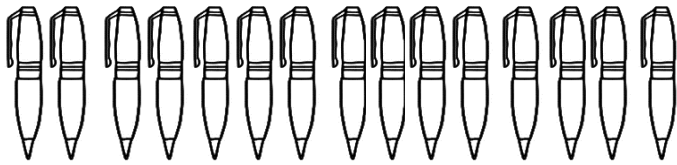
30 - \_\_\_\_\_

11 - \_\_\_\_\_

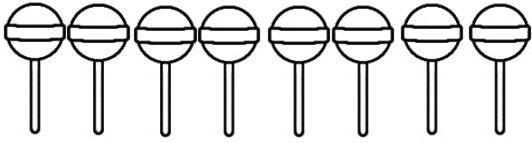
8 - \_\_\_\_\_

20 - \_\_\_\_\_

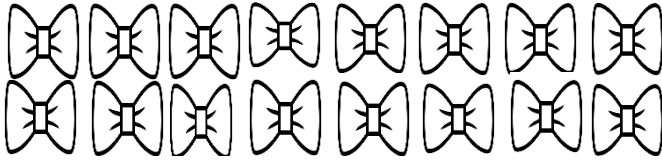
Q7. Count and match



16



15



8



5