





<p align="center"><u>ST. Thomas School, Sahibabad</u> <u>Worksheet for Annual Examination (2023-2024)</u> <u>Class-VII Subject-General Knowledge</u></p>		
	<p>Time-1 hr</p> <p align="right">M.M:25</p> <p align="right">Marks Obtained_____</p> <p>Name: _____ Section: ____ RollNo. ____ Date:_____</p>	
I	Fill in the blanks	[4]
1.	Rickets is caused by the deficiency of _____.	
2.	Karbi Youth Festival 2024 will be organized in _____.	
3.	Short sightedness could be corrected by using _____ lens.	
4.	Koto is a famous musical instrument of _____.	
II	Choose the correct option	[4]
1.	The literary festival described by Bill Clinton in 2001 as “The Woodstock of the Mind” is a. Brooklyn Book Festival b. Hay Festival c. Verve Poetry Festival d. None of these	
2.	The “Father of Observational Astronomy is a. Alexander Fleming b. Lous Pasteur c. Galeleo Galilei d. Isaac Newton	
3.	The first person who walked in space was a. Clerk Maxwell b. Alexei Leonov c. Marie Curie d. none of these	
4.	The name of the parent company of Google is a. Apple Inc. b. Microsoft.com c. Alphabet Inc. d. abc.xyz	
III	State True or False	[4]
1.	Bcc stands for Blind carbon copy. (_____)	
2.	Victoria falls is located in Southern America. (_____)	
3.	Suryakumar Yadav won the ICC Men's T20I Cricketer of the Year award. (_____)	
4.	Dalai Lama was the 11 th spiritual leader of Tibetan Buddhism. (_____)	
IV.	Answer in one word	[4]
1.	The first African women to win the Nobel Peace Prize _____.	
2.	The Museum of Cairo _____.	
3.	The founder of Amazon.com _____.	
4.	India’s first Mars Orbiter Mission Space Probe is called _____.	
V.	Answer the following in a sentence	[5]

1.	Name the museum where the painting 'Mona Lisa' is displayed. _____.	
2.	What do you mean by 'Deferred Live'? _____.	
3.	Name the Bengali social reformer encouraged widow re-marriage to uplift social status of women in the society? _____.	
4.	Which ministry's tableau secured the first prize at the Republic Day Parade 2024? _____.	
5.	What is meant by 'PET' in nuclear medicine? _____ _____.	
VI.	Identify the following pictures	[4]
	 (a) _____	 (b) _____
	 (c) _____	 (d) _____