





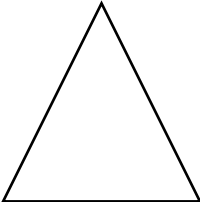
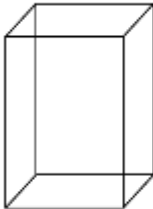





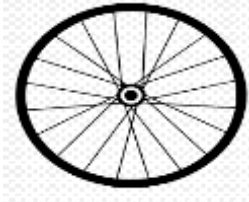
St. Thomas School, Sahibabad
Cycle Test -1 (2024-25)
Worksheet
Class: I
Mathematics

Time: 1 Hour

Marks obtained: _____ MM: 25

Name: _____ Section: _____ Roll no.: _____ Date: _____

Q1.	Tick (✓) the correct option:	
a)	Which number comes just before 6?	1
	a) 7 <input type="checkbox"/> b) 5 <input type="checkbox"/> c) 4 <input type="checkbox"/>	
b)	Which number comes just after 3?	1
	a) 2 <input type="checkbox"/> b) 5 <input type="checkbox"/> c) 4 <input type="checkbox"/>	
c)	Which number comes between 6 and 8?	1
	a) 5 <input type="checkbox"/> b) 7 <input type="checkbox"/> c) 6 <input type="checkbox"/>	
d)	Which is the correct spelling of shape ?	1
	a) triangle <input type="checkbox"/> b) tirangle <input type="checkbox"/> c) tarangle <input type="checkbox"/>	
e)	Which is an example of circle?	1
	a) coin <input type="checkbox"/> b) rope <input type="checkbox"/> c) book <input type="checkbox"/>	
Q2.	Fill in the blanks:	
a)	Eyeball is an example of _____.	1
b)	A triangle has three sides and _____ corners.	1
c)	A square has _____ equal sides.	1
d)	A circle has _____ sides.	1
e)	Black board is an example of _____.	1
Q3.	Find out the number of plane shapes in the given figure:	
a)	Triangle <input type="checkbox"/>	1
b)	Square <input type="checkbox"/>	1

c)	Rectangle 	1	
d)	circle 	1	
Q4.	Write the number names:		
a)	7- _____	1	
b)	1 - _____	1	
c)	3 - _____	1	
d)	4 - _____	1	
e)	2 - _____	1	
Q5.	Put the sign (<, >)		
a)	9  6	1	
b)	2  7	1	
Q6.	Match the Following objects with correct shapes:		
			1
			1
			1
			1