

St. Thomas School, Sahibabad
Annual Examination (2023-2024)
Class V
WORKSHEET Computer

Time: 2 Hours

Marks Obtained: _____




M.M.: 60

Name: _____

Section: _____

Roll No.: _____

Date: _____

Q1.	Tick (✓) the correct answer:	
i.	_____ is the shortcut key for opening a workbook. a. Ctrl + S b. Ctrl + O c. Ctrl + V	1
ii.	_____ application is used for video chat. a. Skype b. Google Maps c. Google Translate	1
iii.	_____ are used to draw flowchart. a. Symbols b. Steps c. Program	1
iv.	_____ allows people to connect with those who share common interests. a. Translator b. Social Networking c. Weather app	1
v.	The received emails are stored in _____. a. Inbox b. Sent c. Drafts	1
vi.	_____ represents Start or Stop in a flowchart. a.  b.  c. 	1
vii.	A _____ is a group of cells that runs horizontally. a. rows b. columns c. cells	1
viii.	Repeating a set of statements is called _____. a. Loop b. Sequence c. Selection	1
ix.	_____ is used for video conferencing. a. Skype b. Youtube c. Snapchat	1
x.	By default, text takes _____ alignment. a. left b. right c. centre	1
Q2.	Fill in the blanks:	
i.	Each intersection of a row and column forms a _____.	1
ii.	www.youtube for kids.com is used to search for _____.	1
iii.	Spreadsheet is an electronic grid in which _____ is stored in rows and columns.	1
iv.	There are _____ types of programming statements.	1
v.	By default, there are _____ sheet/sheets in a workbook.	1
Q3.	Write T for true or F for false:	
i.	Arrows are used to connect different parts of the flowchart. _____	1

ii.	By default, text is right aligned and numbers are left aligned. _____	1
iii.	In sequence, flow of control of program is based on a condition. _____	1
iv.	Calc is a part of Microsoft Office suite. _____	1
v.	In Iteration you repeat statements. _____	1
Q4.	Write the answer in one word:	
i.	The bar which displays the content of the selected cell _____	1
ii.	Feature used to translate text from one language to another _____	1
iii.	The column letter and row number that identifies a single cell _____	1
iv.	Process of finding information on internet _____	1
v.	Process of writing step by step instructions in a computer language _____	1
Q5.	Label the parts of the given window:	6
	<p>The image shows a screenshot of the Microsoft Excel application window. Several parts are highlighted with empty boxes and arrows pointing to them for labeling:</p> <ul style="list-style-type: none"> Two boxes at the top point to the Title Bar (containing 'Book1 - Excel') and the Ribbon (containing tabs like File, Home, Insert, etc.). Two boxes on the left point to the Formula Bar (showing '=1') and the Grid (specifically the column letter 'A' and row number '1'). A box on the right points to the Vertical Scroll Bar. A box at the bottom points to the Sheet Tabs (showing 'Sheet1', 'Sheet2', 'Sheet3'). 	
Q6.	Write the answers of the following application-based question:	
i.	Ruhani saw his brother's Facebook page open and started sending messages to strangers. Why was this dangerous? _____ _____	2

ii.	Rohan wants to create a list of grocery items purchased and their price and find out the total amount spent. Which option of MS Excel can he use? _____	2
Q7.	Define the following terms:	
i.	Algorithm - _____ _____	2
ii.	Connectors - _____ _____	2
Q8.	Answer the following questions in one or two lines:	
i.	Name any two websites providing the facility of online book reading. _____	2
ii.	Write one disadvantage of flowchart. _____	2
iii.	List the types of data which can be entered in a cell. _____	2
iv.	Write one advantage of algorithm. _____	2
Q9.	Write steps to:	
i.	To find the weather condition of a place _____ _____ _____	3

ii.	<p>Save a workbook</p> <hr/> <hr/> <hr/> <hr/>	3
Q10.	Answer the following questions:	
i.	<p>What is the difference between a workbook and a worksheet?</p> <hr/> <hr/> <hr/> <hr/> <hr/> <hr/>	3
ii.	<p>What is a flowchart? Name the different symbols used in a flowchart.</p> <hr/> <hr/> <hr/> <hr/> <hr/> <hr/>	3
iii.	<p>What do you understand by Social Networking sites? Name any two.</p> <hr/> <hr/> <hr/> <hr/> <hr/> <hr/>	3