



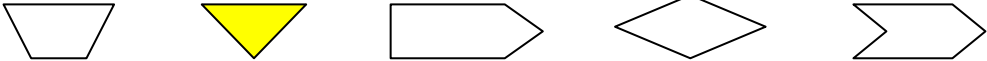


ST. THOMAS SCHOOL, SAHIBABAD

Answer Key- WS-6(2020-2021)

Mathematics

Class-1

Q1.	Tick the square: 
Q2.	Write the name of the shape of the following: a. A pencil box - Rectangle b. The moon - Circle c. A bangle - Circle d. An egg - Oval e. A mountain - Triangle
Q3.	How many fishes are there?  - 8
Q4.	Tick the shape which has more sides: 
Q5.	Which number is missing? 1 4 1 5 1 6 1 8 1 9 2 0 - 17
Q6.	Answer the following: a. Write the number forty five. 45 b. What number comes after 36? 37 c. Which is the biggest number in (24 16 38)? 38 d. Write the expanded form of 29. 20 + 9 e. Write the number name for 16. Sixteen
Q7.	Tick the shape which is same as this  . 
Q8.	How many vertices does this shape have? 5 