

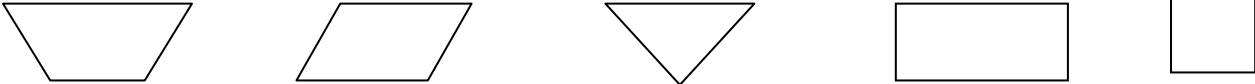



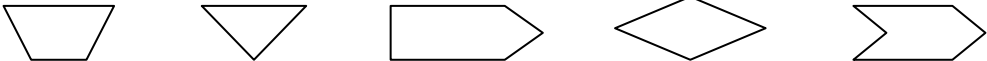

ST. THOMAS SCHOOL, SAHIBABAD

Worksheet-6(2020-21)

Mathematics

Class-I

TEST-1

Q1.	Tick the square: 
Q2.	Write the name of the shape of the following: a. A pencil box - _____ b. The moon - _____ c. A bangle - _____ d. An egg - _____ e. A mountain - _____
Q3.	How many fishes are there?  . _____
Q4.	Tick the shape which has more sides: 
Q5.	Which number is missing? 1 4      1 5      1 6      1 8      1 9      2 0 - _____
Q6.	Answer the following: a. Write the number forty five. _____ b. What number comes after 3 6? _____ c. Which is the biggest number in (24 16 38)? _____ d. Write the expanded form of 2 9. _____ e. Write the number name for 1 6. _____
Q7.	Tick the shape which is same as this  . 
Q8.	How many vertices does this shape have? _____ 

NOTE: Do the worksheets in a separate notebook or A-4 sheets if the notebook is not available.