

**ST.THOMAS KINDERGARTEN, SAHIBABAD**  
**MATHS PRACTICE SHEET**  
**CYCLE-IV**

TOTAL MARKS: - 35  
 WRITTEN: - 25  
 ORAL:- 10

NAME: - \_\_\_\_\_

ROLL NO. :- \_\_\_\_\_

CLASS- NURSERY SEC.- \_\_\_\_\_

DATE:- \_\_\_\_\_

Q1. Fill in the missing number: -

( $\frac{1}{2} \times 18 = 9$ )

<b>T</b>	<b>O</b>		<b>T</b>	<b>O</b>		<b>T</b>	<b>O</b>		<b>T</b>	<b>O</b>
<b>1</b>	<b>1</b>		<b>2</b>	<b>1</b>		<b>3</b>	<b>1</b>		<b>4</b>	<b>1</b>
•	•		•	•		•	•		•	•
<b>1</b>	<b>3</b>		<b>2</b>	<b>3</b>		<b>3</b>	<b>3</b>		<b>4</b>	<b>3</b>
<b>1</b>	<b>4</b>		<b>2</b>	<b>4</b>		<b>3</b>	<b>4</b>		•	•
•	•		•	•		•	•		•	•
<b>1</b>	<b>6</b>		<b>2</b>	<b>6</b>		<b>3</b>	<b>6</b>		<b>4</b>	<b>6</b>
•	•		•	•		•	•		•	•
<b>1</b>	<b>8</b>		<b>2</b>	<b>8</b>		•	•		<b>4</b>	<b>8</b>
•	•		•	•		<b>3</b>	<b>9</b>		•	•
<b>2</b>	<b>0</b>		<b>3</b>	<b>0</b>		•	•		<b>5</b>	<b>0</b>

Q2. Write the number that comes in between the given number:-

(1X6=6)






7        9                      42        44

23        25                      12        14

38        40                      8        10

Q3. Count and write: -

(1x5=5)

	<input type="text"/>
	<input type="text"/>
	<input type="text"/>
	<input type="text"/>
	<input type="text"/>

Q4. Backward Counting (10-1):-

( $\frac{1}{2} \times 10 = 5$ )

T	O
.	.
	.
	.
	.
	.
	.
	.
	.
	.
	.

Oral:- Counting 1 to 50, recognition of numbers (1 to 50) and learn backward counting 10 to 1.